



Illuminating Global Education Through Indianic Values

# NEW STANDARD GROUP OF INSTITUTES



**HOME  
ASSIGNMENT  
2024**

Name.....

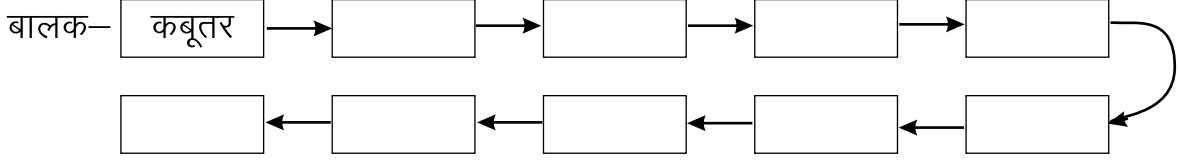
Class.....2nd.....Sec. ....

Branch.....

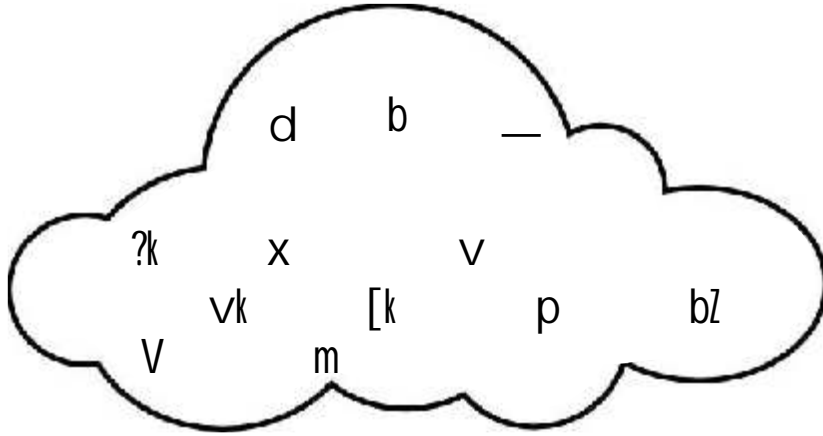
## हिन्दी

1. 'सरल हिन्दी सुलेख पुस्तक' में प्रतिदिन एक पृष्ठ सुलेख लिखकर पृष्ठ संख्या 40 तक पूर्ण कीजिए।

2. आओ बच्चों, पहले शब्द के अन्तिम अक्षर से नए-नए शब्द बनाएँ-



3. दिए गए बादल में कुछ स्वर और व्यंजन आपस में मिल गए हैं, उन्हें छाँटकर सही स्थान पर लिखिए-



स्वर

व्यंजन

\_\_\_\_\_

\_\_\_\_\_

\_\_\_\_\_

\_\_\_\_\_

\_\_\_\_\_

\_\_\_\_\_

\_\_\_\_\_

\_\_\_\_\_

\_\_\_\_\_

\_\_\_\_\_

\_\_\_\_\_

\_\_\_\_\_

4. पेड़-पौधों से हमें क्या लाभ हैं, चार वाक्य लिखिए-

- (i) \_\_\_\_\_
- (ii) \_\_\_\_\_
- (iii) \_\_\_\_\_
- (iv) \_\_\_\_\_

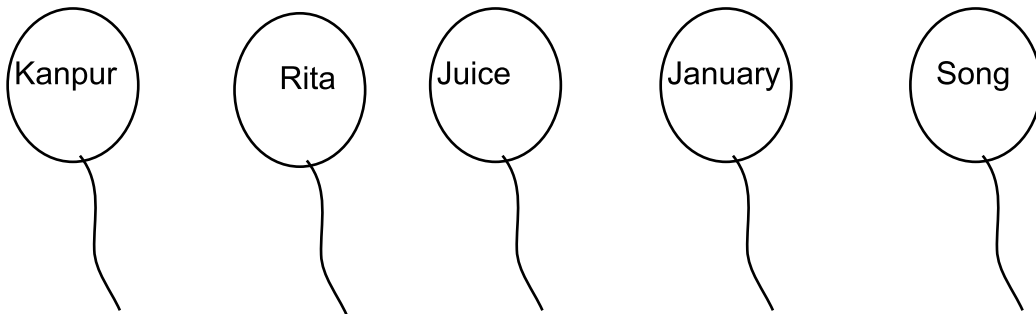
## ENGLISH

1- Choose bl/sl/ar words to complete each sentence.

park, slide, star, blue, bloom

- (a) I like playing on the \_\_\_\_\_ at the playground.
- (b) I saw a bright \_\_\_\_\_ in the sky.
- (c) Many flowers \_\_\_\_\_ in the spring .
- (d) The sky is \_\_\_\_\_.
- (e) My grand father walks in the \_\_\_\_\_ .

2- Colour the balloons. Common noun with green colour and proper noun with blue colour.



3- Circle the correct spelling.

- (i) Mothere                      Mother                      Motther
- (ii) Schole                      Schoole                      School
- (iii) Cake                      Caake                      Kake
- (iv) Playe                      Play                      Pllay

4- Complete the cursive writing book upto page no. 40.

5- Learn lesson 1 and 2 of Reader (Book work and Notebook work.)

(P.T.O.)

**1- Arrange the numbers in increasing order.**

(a)

46	61	68	70	48

(b)

39	45	92	24	53

**2- Fill the missing numbers by counting forward and backward.**

(a) 95, 96, \_\_\_\_\_, \_\_\_\_\_, \_\_\_\_\_, 100, \_\_\_\_\_, \_\_\_\_\_

(b) 19, 18 \_\_\_\_\_, \_\_\_\_\_, \_\_\_\_\_, \_\_\_\_\_, \_\_\_\_\_, 12

**3- If  $\Delta$  = hundred,  $\bigcirc$  = tens and  $\square$  = ones, write the numeral for each of following.**

(a)  $\begin{matrix} \Delta & \Delta & \Delta \\ \Delta & \Delta & \Delta \end{matrix} + \bigcirc \bigcirc + \begin{matrix} \square & \square \\ \square & \square \end{matrix} = \underline{\hspace{2cm}}$

(b)  $\begin{matrix} \Delta & \Delta \\ \Delta & \Delta \end{matrix} + \bigcirc + \square = \underline{\hspace{2cm}}$

(c)  $\Delta \Delta \Delta + \begin{matrix} \bigcirc & \bigcirc \\ \bigcirc & \bigcirc \end{matrix} + \begin{matrix} \square \\ \square \end{matrix} = \underline{\hspace{2cm}}$

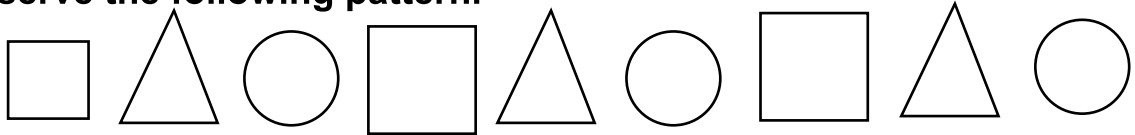
**4- Write the number names for each of the following after adding it.**

(a)  $900 + 20 + 1 = \underline{\hspace{2cm}}$

(b)  $600 + 70 + 9 = \underline{\hspace{2cm}}$

(c)  $500 + 10 + 3 = \underline{\hspace{2cm}}$

**5- Observe the following pattern.**



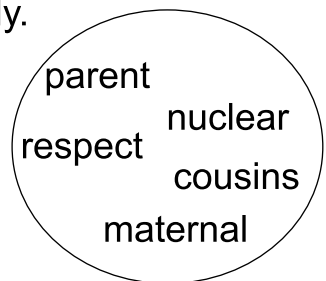
- (a) The fifth figure in the pattern is \_\_\_\_\_.
- (b) The ninth figure in the pattern is \_\_\_\_\_.

**6- Learn the tables 2 to 10.**

**EVS**

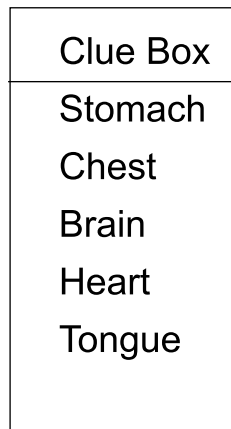
**1- Fill in the blanks with the help of clue box.**

- (i) We should \_\_\_\_\_ our elders.
- (ii) My mother's family is my \_\_\_\_\_ family.
- (iii) A \_\_\_\_\_ family has one set of family.
- (iv) Children of my uncle are my \_\_\_\_\_.
- (v) My father and my mother are my \_\_\_\_\_.



**2- Find five body parts in this matrix and encircle it-**

E	H	E	O	J	C	A	J
C	E	R	A	K	V	S	K
H	A	T	D	B	B	D	L
E	R	Y	F	R	N	F	X
S	T	O	M	A	C	H	C
T	P	U	G	I	M	G	B
N	Q	T	O	N	G	U	E
R	W	I	H	L	Z	H	N



**3- Identify the word and unscramble-**

- (i) SSITER \_\_\_\_\_ (ii) BORTHRE \_\_\_\_\_
- (iii) FMLYIA \_\_\_\_\_ (iv) OMTHRE \_\_\_\_\_
- (v) GRNDAFTHAER \_\_\_\_\_

**(P.T.O)**

4- Write the correct reaction below these faces-

[Angry, Confused, Sleepy, Happy, Sick]



\_\_\_\_\_

## COMPUTER

1- What is computer?

Ans. \_\_\_\_\_  
\_\_\_\_\_

2- Write the four main parts of computer.

(i) \_\_\_\_\_ (ii) \_\_\_\_\_  
(iii) \_\_\_\_\_ (iv) \_\_\_\_\_

3- Write the name of 5 places where computer is used.

(i) \_\_\_\_\_ (ii) \_\_\_\_\_  
(iii) \_\_\_\_\_ (iv) \_\_\_\_\_  
(v) \_\_\_\_\_

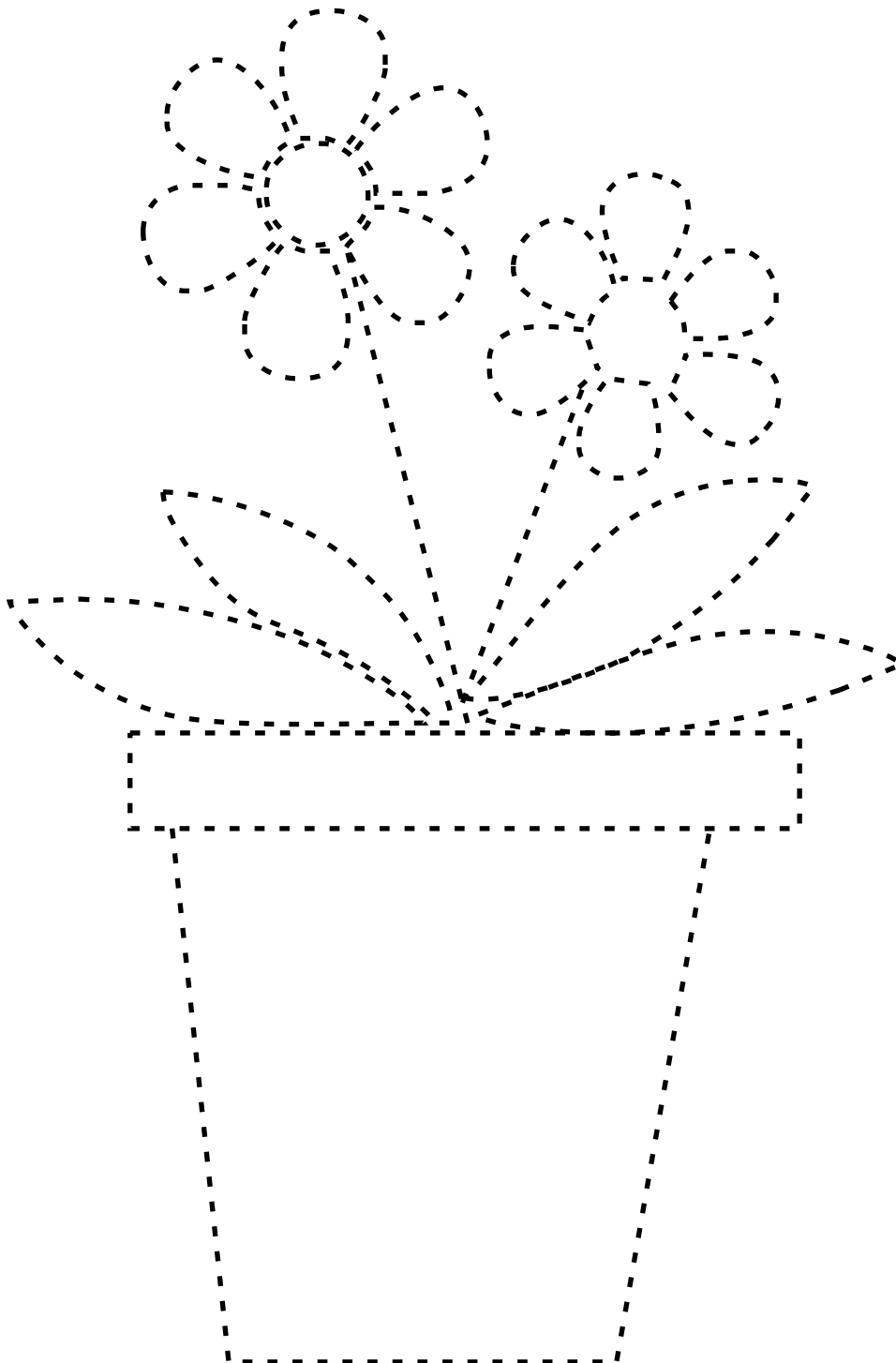
4- Write the name of 2 input and 2 output devices.

Input devices	Output devices
(i) _____	(i) _____
(ii) _____	(ii) _____

5- Learn lesson 1.

# ART

1-Join the dots and colour the picture.



2- Draw a 'Fish' and paste pencil shavings on it. ( In Art fair notebook)

## MORAL TEACHING

1- What work do you do to help the following people-

(i) Father- \_\_\_\_\_

(ii) Mother- \_\_\_\_\_

(iii) Friends- \_\_\_\_\_

2- Your favourite pencil broke into half by your friend. In this situation what will you do / how do you react?



---

---

---

---